

Adı:.....
Soyadı:.....
Sınıfı ve No:.....

2.SINIF MATEMATİK ELDELİ TOPLAMA İŞLEMİ

ETKİNLİK-4

Aşağıdaki toplama işlemlerini örnekteki gibi eldeleri yazarak yapınız.

$$\begin{array}{r} \textcircled{1} \leftarrow \\ 1 \text{ onluk} + 5 \text{ birlik} \quad 15 \\ + 2 \text{ onluk} + 7 \text{ birlik} \quad + 27 \\ \hline 4 \text{ onluk} + 2 \text{ birlik} \quad 42 \end{array}$$

$$\begin{array}{r} \textcircled{} \leftarrow \\ 2 \text{ onluk} + 4 \text{ birlik} \quad 24 \\ + 3 \text{ onluk} + 9 \text{ birlik} \quad + 39 \\ \hline \dots \text{ onluk} + \dots \text{ birlik} \quad \dots \end{array}$$

$$\begin{array}{r} \textcircled{} \leftarrow \\ 4 \text{ onluk} + 2 \text{ birlik} \quad 42 \\ + 3 \text{ onluk} + 8 \text{ birlik} \quad + 38 \\ \hline \dots \text{ onluk} + \dots \text{ birlik} \quad \dots \end{array}$$

$$\begin{array}{r} \textcircled{} \leftarrow \\ 6 \text{ onluk} + 4 \text{ birlik} \quad 64 \\ + 1 \text{ onluk} + 7 \text{ birlik} \quad + 17 \\ \hline \dots \text{ onluk} + \dots \text{ birlik} \quad \dots \end{array}$$

$$\begin{array}{r} \textcircled{} \leftarrow \\ 5 \text{ onluk} + 6 \text{ birlik} \quad 56 \\ + 3 \text{ onluk} + 4 \text{ birlik} \quad + 34 \\ \hline \dots \text{ onluk} + \dots \text{ birlik} \quad \dots \end{array}$$

$$\begin{array}{r} \textcircled{} \leftarrow \\ 3 \text{ onluk} + 4 \text{ birlik} \quad 34 \\ + 3 \text{ onluk} + 6 \text{ birlik} \quad + 36 \\ \hline \dots \text{ onluk} + \dots \text{ birlik} \quad \dots \end{array}$$

$$\begin{array}{r} \textcircled{} \leftarrow \\ 2 \text{ onluk} + 5 \text{ birlik} \quad 25 \\ + 2 \text{ onluk} + 5 \text{ birlik} \quad + 25 \\ \hline \dots \text{ onluk} + \dots \text{ birlik} \quad \dots \end{array}$$

$$\begin{array}{r} \textcircled{} \leftarrow \\ 4 \text{ onluk} + 6 \text{ birlik} \quad 46 \\ + 2 \text{ onluk} + 6 \text{ birlik} \quad + 26 \\ \hline \dots \text{ onluk} + \dots \text{ birlik} \quad \dots \end{array}$$

$$\begin{array}{r} \textcircled{} \leftarrow \\ 2 \text{ onluk} + 8 \text{ birlik} \quad 28 \\ + 4 \text{ onluk} + 2 \text{ birlik} \quad + 42 \\ \hline \dots \text{ onluk} + \dots \text{ birlik} \quad \dots \end{array}$$

$$\begin{array}{r} \textcircled{} \leftarrow \\ 3 \text{ onluk} + 7 \text{ birlik} \quad 37 \\ + 4 \text{ onluk} + 9 \text{ birlik} \quad + 49 \\ \hline \dots \text{ onluk} + \dots \text{ birlik} \quad \dots \end{array}$$

$$\begin{array}{r} \textcircled{} \leftarrow \\ 2 \text{ onluk} + 9 \text{ birlik} \quad 29 \\ + 3 \text{ onluk} + 8 \text{ birlik} \quad + 38 \\ \hline \dots \text{ onluk} + \dots \text{ birlik} \quad \dots \end{array}$$

$$\begin{array}{r} \textcircled{} \leftarrow \\ 5 \text{ onluk} + 8 \text{ birlik} \quad 58 \\ + 1 \text{ onluk} + 8 \text{ birlik} \quad + 18 \\ \hline \dots \text{ onluk} + \dots \text{ birlik} \quad \dots \end{array}$$

www.leventyagmuroglu.com

www.leventyagmuroglu.com


www.leventyagmuroglu.com

Adı:.....
Soyadı:.....
Sınıfı ve No:.....


2.SINIF MATEMATİK ELDELİ TOPLAMA İŞLEMİ

ETKİNLİK-4

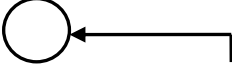
Aşağıdaki toplama işlemlerini yapınız. Eldeleri kutulara yazınız.


$$\begin{array}{r} 4 \text{ onluk} + 7 \text{ birlik} \\ + 4 \text{ onluk} + 7 \text{ birlik} \\ \hline \end{array} \begin{array}{r} 47 \\ + 47 \\ \hline \end{array}$$


.... onluk + birlik


$$\begin{array}{r} 2 \text{ onluk} + 3 \text{ birlik} \\ + 3 \text{ onluk} + 8 \text{ birlik} \\ \hline \end{array} \begin{array}{r} 23 \\ + 38 \\ \hline \end{array}$$


.... onluk + birlik


$$\begin{array}{r} 3 \text{ onluk} + 8 \text{ birlik} \\ + 3 \text{ onluk} + 9 \text{ birlik} \\ \hline \end{array} \begin{array}{r} 38 \\ + 39 \\ \hline \end{array}$$


.... onluk + birlik


$$\begin{array}{r} 5 \text{ onluk} + 5 \text{ birlik} \\ + 1 \text{ onluk} + 7 \text{ birlik} \\ \hline \end{array} \begin{array}{r} 55 \\ + 17 \\ \hline \end{array}$$


.... onluk + birlik


$$\begin{array}{r} 7 \text{ onluk} + 3 \text{ birlik} \\ + 1 \text{ onluk} + 9 \text{ birlik} \\ \hline \end{array} \begin{array}{r} 73 \\ + 19 \\ \hline \end{array}$$


.... onluk + birlik


$$\begin{array}{r} 4 \text{ onluk} + 6 \text{ birlik} \\ + 4 \text{ onluk} + 9 \text{ birlik} \\ \hline \end{array} \begin{array}{r} 46 \\ + 49 \\ \hline \end{array}$$


.... onluk + birlik


$$\begin{array}{r} 2 \text{ onluk} + 3 \text{ birlik} \\ + 5 \text{ onluk} + 8 \text{ birlik} \\ \hline \end{array} \begin{array}{r} 23 \\ + 58 \\ \hline \end{array}$$


.... onluk + birlik


$$\begin{array}{r} 4 \text{ onluk} + 7 \text{ birlik} \\ + 3 \text{ onluk} + 3 \text{ birlik} \\ \hline \end{array} \begin{array}{r} 47 \\ + 33 \\ \hline \end{array}$$


.... onluk + birlik


$$\begin{array}{r} 2 \text{ onluk} + 8 \text{ birlik} \\ + 2 \text{ onluk} + 7 \text{ birlik} \\ \hline \end{array} \begin{array}{r} 28 \\ + 27 \\ \hline \end{array}$$


.... onluk + birlik


$$\begin{array}{r} 5 \text{ onluk} + 5 \text{ birlik} \\ + 2 \text{ onluk} + 9 \text{ birlik} \\ \hline \end{array} \begin{array}{r} 55 \\ + 29 \\ \hline \end{array}$$

.... onluk + birlik


$$\begin{array}{r} 7 \text{ onluk} + 7 \text{ birlik} \\ + 1 \text{ onluk} + 7 \text{ birlik} \\ \hline \end{array} \begin{array}{r} 77 \\ + 17 \\ \hline \end{array}$$

.... onluk + birlik


$$\begin{array}{r} 3 \text{ onluk} + 8 \text{ birlik} \\ + 1 \text{ onluk} + 8 \text{ birlik} \\ \hline \end{array} \begin{array}{r} 38 \\ + 18 \\ \hline \end{array}$$

.... onluk + birlik

www.leventyagmuroglu.com

www.leventyagmuroglu.com

www.leventyagmuroglu.com